

Chipo's Dinner

Poor Chipo. She only has enough time to eat 10 leaves before the sun sets. Which flowers should she choose?


Color the 10 segments of Chipo's body with 2 different colors. Then write a number sentence to match. The first one has been done for you.

Example:




$$\underline{6} + \underline{4} = \underline{10}$$

1.




$$\underline{\quad} + \underline{\quad} = \underline{\quad}$$

2.




$$\underline{\quad} + \underline{\quad} = \underline{\quad}$$

3.




$$\underline{\quad} + \underline{\quad} = \underline{\quad}$$

4.



$$\underline{\quad} + \underline{\quad} = \underline{\quad}$$

Challenge: Use THREE colors to make a new number sentence.



$$\underline{\quad} + \underline{\quad} + \underline{\quad} = \underline{\quad}$$